

NEGATIVE NUMBERS

CONTENT DOMAIN REFERENCES:
4N5, 5N5, 6N5

KS2 SATS

PRACTICE QUESTIONS BY TOPIC

1 Put these temperatures in order, starting with the **lowest**.

[2015]


21°C

-13°C

-24°C

0°C

35°C

 °C °C °C °C °C

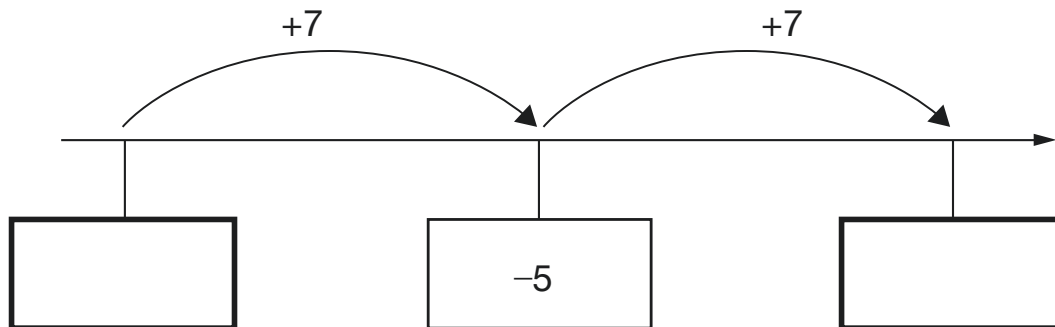
lowest

[1 mark]

2 Here is part of a number line.

[2016S]

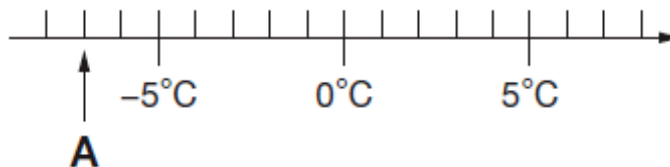
Write the missing numbers in the boxes.



[1 mark]

3 Here is part of a temperature scale.

[New]



What is the temperature shown at **A**?

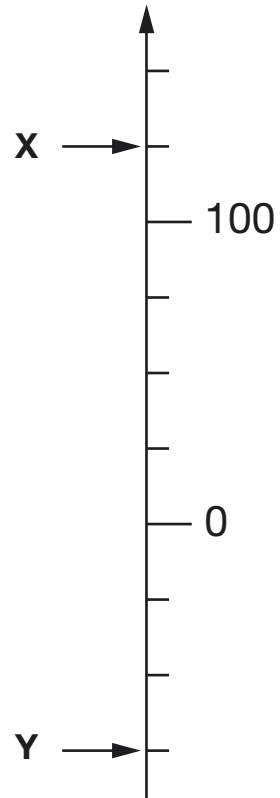
°C

[1 mark]

4

Here is part of a number line.

[2015]



What is the value of **X**?



X =

What is the value of **Y**?



Y =

[2 marks]

5

This table shows the temperature at 9am on three days in January.

[2016]

1st January	8th January	15th January
+ 5°C	- 4°C	+ 1°C

What is the difference between the temperature on 1st January and the temperature on 8th January?

 °C

On 22nd January the temperature was 7 degrees lower than on 15th January.

What was the temperature on 22nd January?

 °C

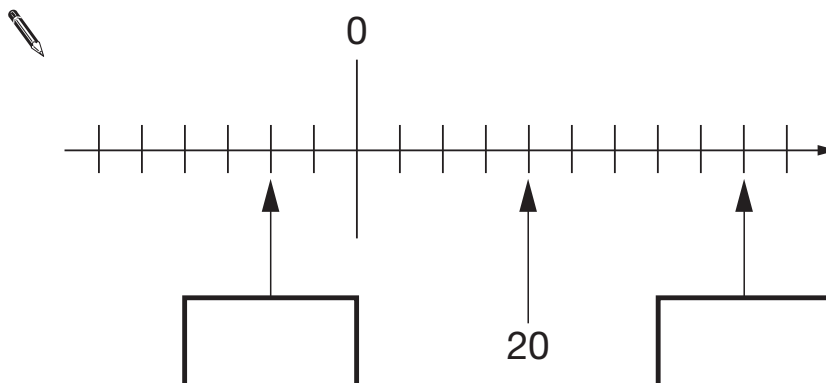
[2 marks]

6

Here is part of a number line.

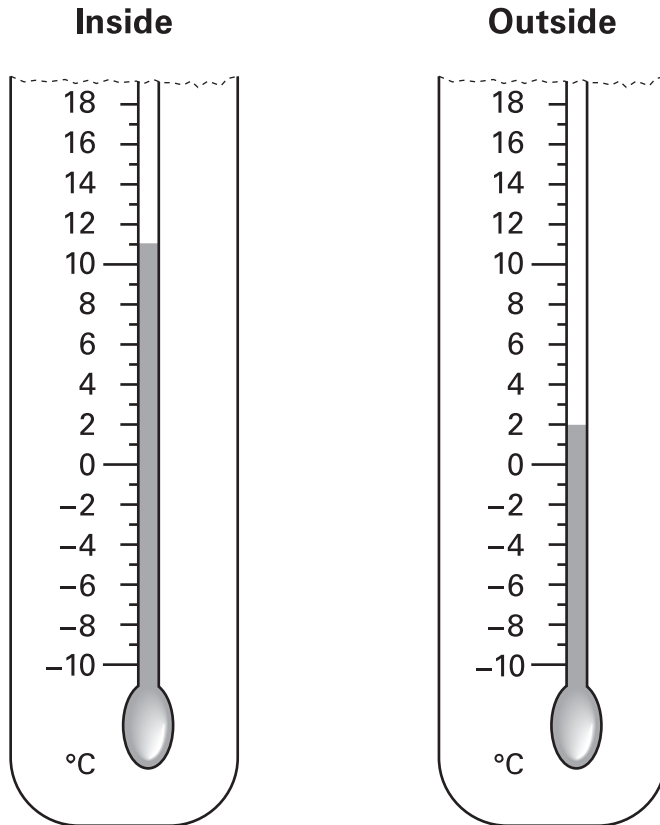
[2009]

Write the missing numbers in the boxes.



[2 marks]

Two thermometers show the temperature inside and outside a greenhouse on a day in January.



How many degrees **warmer** was it inside the greenhouse than outside?


 °C

Later the temperatures were

inside	outside
-1°C	-8°C

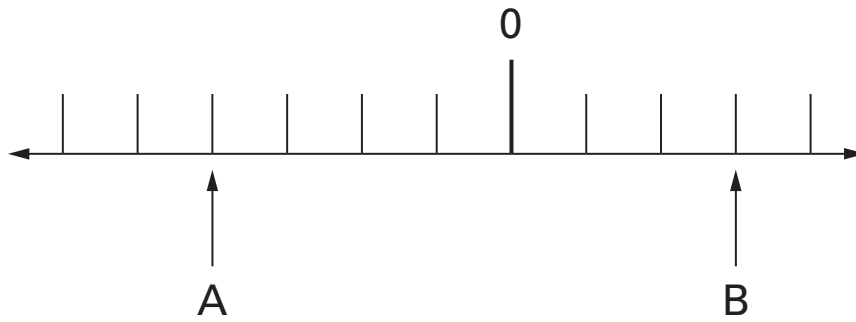
What is the difference between these two temperatures?


 °C

8

A and **B** are two numbers on the number line below.

[2005]



The **difference** between **A** and **B** is 140

Write the values of **A** and **B**.

[2 marks]

9

[New]

The temperature inside an aeroplane is $20\text{ }^{\circ}\text{C}$.

The temperature outside the aeroplane is $-30\text{ }^{\circ}\text{C}$.



What is the difference between these temperatures?

degrees

[1 mark]

10

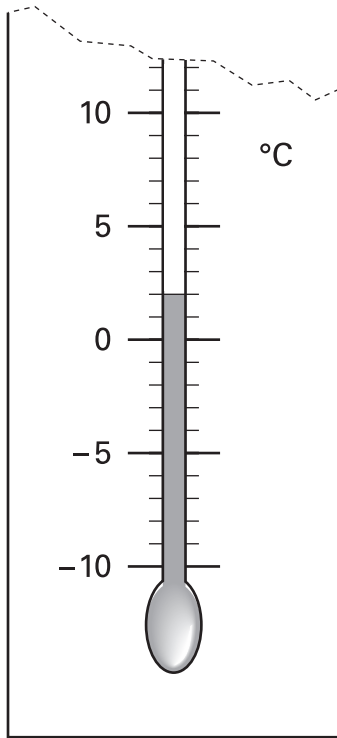
Circle **two** numbers which have a **difference** of 2

[New]

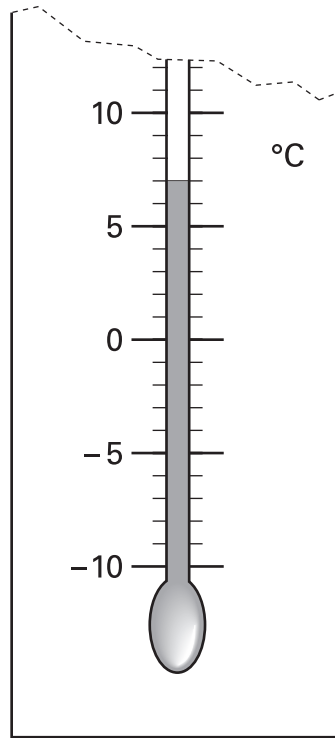
-1 -0.5 0 0.5 1 1.5

[1 mark]

These are the temperatures in York and Rome on a day in winter.



York



Rome

How many degrees **colder** is it in York than in Rome?

 °C

On another day, the temperature in York is **4°C**

Rome is **7 degrees colder** than York.

What is the temperature in **Rome**?

 °C

[2 marks]

This weather chart shows the highest and lowest temperatures in a town on five days in March.

	Temperature °C	
	highest	lowest
Monday	+7	0
Tuesday	+7	-2
Wednesday	+8	-2
Thursday	+9	+1
Friday	+4	-5

Which day has the greatest difference between the highest and the lowest temperatures?



What is the difference between the lowest temperatures on Thursday and Friday?



degrees

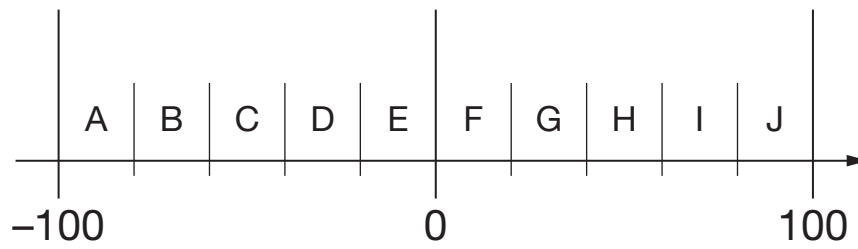
[2 marks]

13

Here is part of a number line.

[2011]

It is divided into equal sections.



Write the letter of the section where each of these numbers belongs.

The number 99 has been done for you.

number	section
99	J
29	
-83	
-15	
44	

[2 marks]