

2

Liam, Sarah and Amy buy lunch at a salad bar.

[2010]

salad bar			
Salads		Desserts	
cheese	£1.20	banana	25p
egg	90p	apple pie	50p
tuna	£1.60	yogurt	35p

Liam has £2.50 to spend.

He buys a tuna salad and an apple pie.

How much money has he got left?



Sarah buys a cheese salad and a yogurt.


Amy buys an egg salad.

How much **more** does Sarah pay than Amy?

Show your method

--

[3 marks]



Tickets for a school play cost £2.75 each.

Dev sold 23 tickets.

How much ticket money did Dev collect?



Holly collected £77 altogether from selling tickets.

How many tickets did she sell?



[2 marks]

5

These are the prices in a shoe shop.

[2006]



boots
£45.50



sandals
£12.75



trainers
£34.99

How much **more** do the boots cost than the trainers?



£

Rosie buys a pair of trainers and a pair of sandals.

How much change does she get from **£50**?


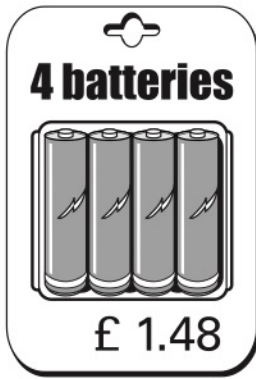
Show your method

[3 marks]

6

A shop sells batteries in **packs of four** and **packs of two**.

[2000]



Simon and Nick want two batteries each.

They buy a **pack of four** and share the cost equally.

How much does each pay?

A large rectangular grid for working out the answer. On the right side of the grid, there is a rectangular box for the final answer.

Mary buys **2 packs of two** batteries.

Hamid buys **1 pack of four**.

How much **more** does Mary pay than Hamid?

Show your method

A large rectangular grid for working out the answer. On the left side, there is a vertical label "Show your method". On the right side of the grid, there is a rectangular box for the final answer.

[4 marks]

8

Megan and Chen are washing cars.

[2013]

Megan gets £39 and Chen gets £55

They share what they get **equally** between them.

How much does each of them get?

Show your method



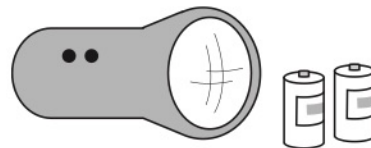
[2 marks]

9

A torch costs £7.65

[2007]


Kate buys a torch and **two** batteries.



She pays £8.75 altogether.

How much does **one** battery cost?

Show your method



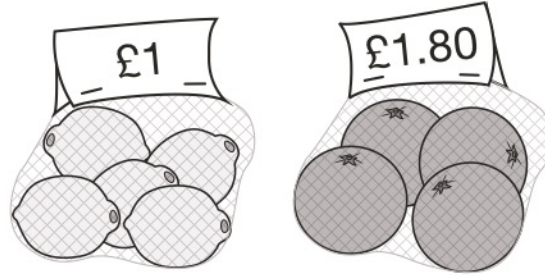
[2 marks]

13

[2016S]

A bag of 5 lemons costs £1

A bag of 4 oranges costs £1.80



How much **more** does one orange cost than one lemon?

Show your method

A large grid for showing the method. The grid is 10 units wide and 10 units high. On the right side, there is a small empty box for the answer.

[2 marks]

14

[2014]

Chen and Megan each buy a sandwich.

Chen gets 5p change from £2

Megan gets £2.25 change from £5

How much **more** does Megan pay than Chen?

Show your method

A large grid for showing the method. The grid is 10 units wide and 10 units high. On the right side, there is a small empty box for the answer.

[2 marks]

22

Miss Mills is making jam to sell at the school fair.

[2016]

Strawberries cost £7.50 per kg.

Sugar costs 79p per kg.

10 glass jars cost £6.90

She uses 12 kg of strawberries and 10kg of sugar to make 20 jars full of jam.

Calculate the total cost to make 20 jars full of jam.

Show your method

[3 marks]

23

Lara had some money.

[2016]

She spent £1.25 on a drink.

She spent £1.60 on a sandwich.

She has **three-quarters** of her money left.

How much money did Lara have to **start with**?

Show your method

[2 marks]